

# Just Turn & Share™

## Math Centers Series

# Time



Volume 14

(Grades 3 – 5)

---

Real-World  
Mathematics  
that  
students  
understand

---

**Kathryn Robinson**

**W**  
**M** WriteMath Enterprises  
Valrico, Florida

The student pages in this publication are designed to be used with appropriate duplicating equipment to reproduce copies for permission classroom use only. WriteMath Enterprises, Inc. grants to classroom teachers **only** to reproduce these student sheets for students in one class per year per book purchased by the school or the teacher him/herself.

Copyright © 1995, 2000, 2007, 2013 WriteMath Publications

All rights reserved – Printed in the U.S.A.

Published by WriteMath Enterprises  
2303 Marseille Ct., Valrico, FL 33596

# 14

# Contents

Introduction .....	III
Blank Answer Sheets .....	VI
Contents.....	VIII
Tax Information .....	2
<i>Week 1: Hourly Television Guide</i> .....	3
<i>Week 2: Half-Hour Television Guide</i> .....	8
<i>Week 3: One- &amp; Two-Hour Television Guide</i> .....	14
Fraction of Time Information .....	20
<i>Week 4: Two-Hour Movie Schedule</i> .....	21
<i>Week 5: Two-Hour+ Movie Schedule</i> .....	27
<i>Week 6: Varied Movie Schedule</i> .....	33
<i>Week 7: Aquarium Park Schedule</i> .....	39
<i>Week 8: Creature Entertainment Schedule</i> .....	45
<i>Week 9: Animal Show Schedule</i> .....	51
<i>Week 10: Amusement Park Schedule</i> .....	57
<i>Week 11: Amusement Park Schedule</i> .....	63
<i>Week 12: Amusement Park Schedule</i> .....	68
<i>Week 13: Postal Route</i> .....	73
<i>Week 14: Postal Route</i> .....	79

<i>Week 15: Postal Route</i> .....	84
U.S.A. Time Zone Chart .....	89
<i>Week 16: Bus Route #1</i> .....	90
<i>Week 17: Bus Route #2</i> .....	96
<i>Week 18: Bus Route #3</i> .....	102
Twenty-Four-Hour Clock Information .....	108
<i>Week 19: Tides</i> .....	109
<i>Week 20: Tides</i> .....	115
<i>Week 21: Tides</i> .....	120
<i>Week 22: Tides</i> .....	125
<i>Week 23: Tides</i> .....	130
<i>Week 24: Tides</i> .....	135
Rubino's Pizza Schedule .....	140
Today's Almanac .....	141
<i>Week 25: Pizza Schedule</i> .....	142
<i>Week 26: Pizza Schedule</i> .....	147
<i>Week 27: Pizza Schedule</i> .....	152
Women's 100-Meter Freestyle Chart .....	157
<i>Week 28: Women's 100-Meter Freestyle</i> .....	158
<i>Week 29: Women's 100-Meter Freestyle</i> .....	163
<i>Week 30: Women's 100-Meter Freestyle</i> .....	168

# MONDAY CABLE

	Channel <b>2</b>	Channel <b>4</b>	Channel <b>6</b>	Channel <b>8</b>	Channel <b>10</b>
--	---------------------	---------------------	---------------------	---------------------	----------------------

## MORNING (a.m.)

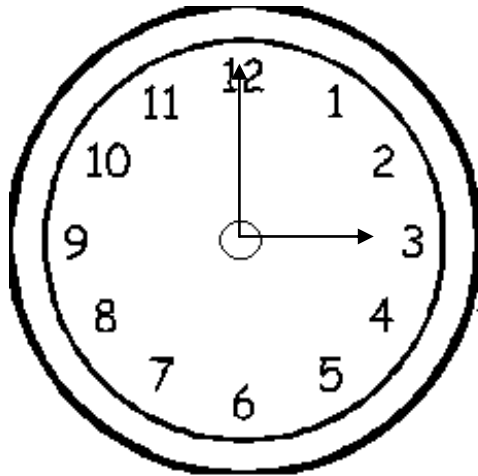
<b>5</b> <sub>00</sub>	News	Family Matters	Sports	NFL Review	Three Stooges
<b>6</b> <sub>00</sub>	Wings	Tennis	Happy Days	Tom & Jerry	WWF
<b>7</b> <sub>00</sub>	Looney Toons	Sew with Sally	Good Morning Tampa	Brady Bunch	Jai Alai
<b>8</b> <sub>00</sub>	Murder Or Less	The Masque	Saved By The Ring	Cartoon Carnival	Talk To Us
<b>9</b> <sub>00</sub>	Heat of The Day	Ted's Angels	Sesame Street	Work-Out With Lilly	Duck Tales

# Time


(Day #1)

What time is it?

**A.**     **:** \_\_\_\_\_



**B.**     **:** \_\_\_\_\_



- C.** What time will it be one hour from ‘**A**’?
- D.** How much time passed between ‘**A**’ and ‘**B**’?
- E.** What was on T.V. on Channel 8 at 7:00 in the morning?
- F.** How long did the show in problem ‘**E**’ last?
- G.** If an adult shut the T.V. off at 7:20 a.m., how many minutes of the show in problem ‘**E**’ did you miss?


\* **A, B, & E**  
 \*\* **C, D, & F**  
 \*\*\* **C, D, F, & G**

# Time

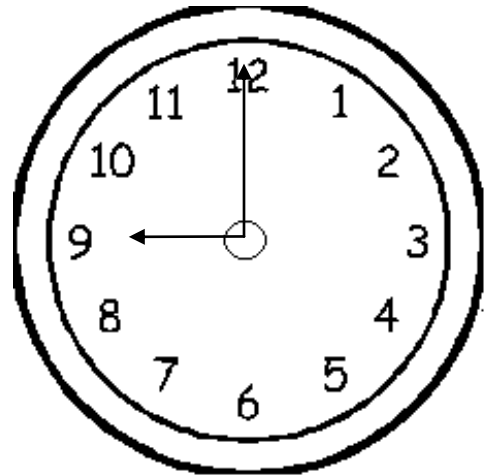
(Day #2)

What time is it?

**A.**     **:** \_\_\_\_\_



**B.**     **:** \_\_\_\_\_



- C.** What time will it be one hour from ‘**A**’?
- D.** How much time passed between ‘**A**’ and ‘**B**’?
- E.** What was on T.V. on Channel 6 at 5:00 in the morning?
- F.** How long did the show in problem ‘**E**’ last?
- G.** If an adult shut the T.V. off at 5:15 a.m., how many minutes of the show in problem ‘**E**’ did you miss?

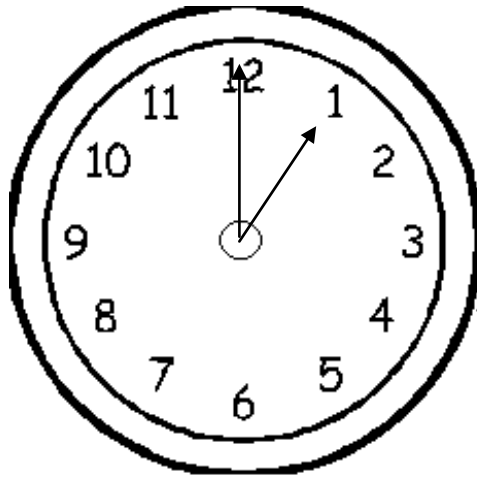
\* **A, C, & F**  
 \*\* **C, E, & F**  
 \*\*\* **C, D, F, & G**

# Time

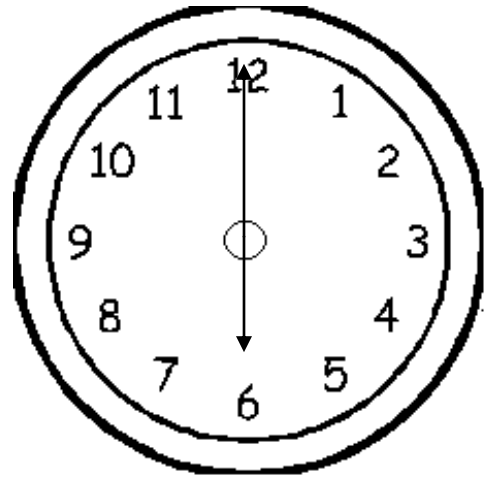
(Day #3)

What time is it?

**A.**     :     \_\_\_\_\_



**B.**     :     \_\_\_\_\_



- C.** What time will it be one hour from ‘**A**’?
- D.** How much time passed between ‘**A**’ and ‘**B**’?
- E.** What was on T.V. on Channel 4 at 8:00 in the morning?
- F.** How long did the show in problem ‘**E**’ last?
- G.** If an adult shut the T.V. off at 8:10 a.m., how many minutes of the show in problem ‘**E**’ did you miss?

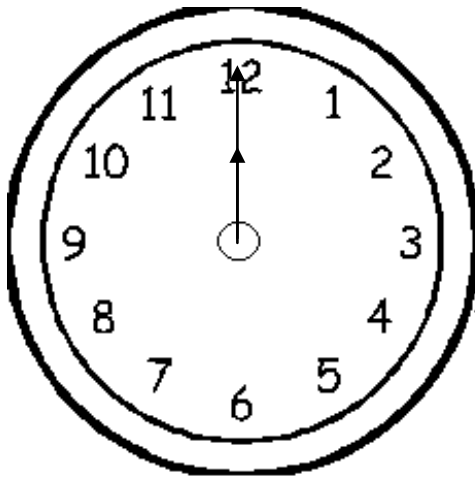
\* **A, B, & E**  
 \*\* **C, D, & F**  
 \*\*\* **C, D, F, & G**

# Time


(Day #4)

What time is it?

**A.**     :     \_\_\_\_\_



**B.**     :     \_\_\_\_\_



- C.** What time will it be one hour from ‘**A**’?
- D.** How much time passed between ‘**A**’ and ‘**B**’?
- E.** What was on T.V. on Channel 2 at 6:00 in the morning?
- F.** How long did the show in problem ‘**E**’ last?
- G.** If an adult shut the T.V. off at 6:45 a.m., how many minutes of the show in problem ‘**E**’ did you miss?

\* **A, C, & F**

\*\* **C, E, & F**

\*\*\* **C, D, F, & G**

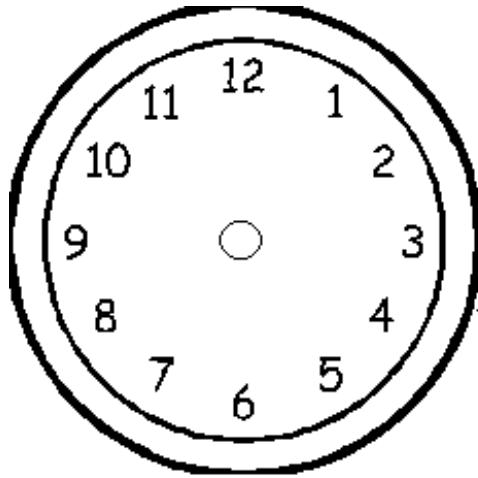


# Time


(Day # \_\_\_\_\_)

What time is it?

**A.**     :     \_\_\_\_\_



**B.**     :     \_\_\_\_\_




- C.** What time will it be one hour from ‘**A**’?
- D.** How much time passed between ‘**A**’ and ‘**B**’?
- E.** What was on T.V. on Channel \_\_\_\_\_ at \_\_\_\_\_:\_\_\_\_\_ in the morning?
- F.** How long did the show in problem ‘**E**’ last?
- G.** If an adult shut the T.V. off at \_\_\_\_\_ a.m., how many minutes of the show in problem ‘**E**’ did you miss?

\* **A, B, & E**  
 \*\* **C, D, & F**  
 \*\*\* **C, D, F, & G**



# Singing & Creeping-A-Long

## Entertainment Schedule

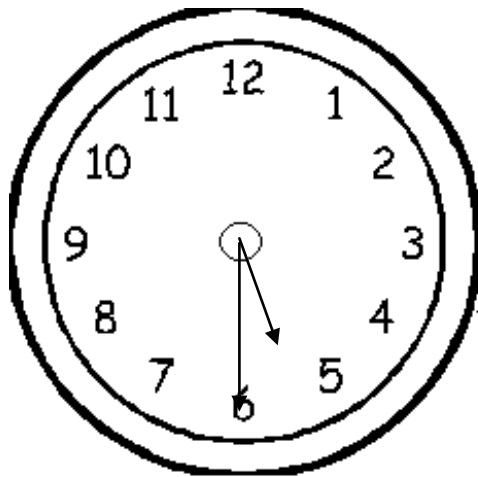
Name of Show	SHOW TIMES 									Location
	10 A.M.	11 A.M.	NOON	1 P.M.	2 P.M.	3 P.M.	4 P.M.	5 P.M.	6 P.M.	
Slithering Sams	10:20		12:00	1:40		3:20		5:00	6:40	Snake House
Venom Demo	10:30	11:30	12:30	1:30	2:30	3:30	4:30	5:30		Rattle House
Slick Willie		11:30	12:45		2:00	3:15	4:30	5:45		Alligator House
Darla's Sing-A-Long	One Show Only: Noon Reservations Required									Our Cool Pad
Touche Toucan	10:00		12:00		2:00		4:00		6:00	Bird House
Slow Samantha	10:00	11:05	12:10	1:15	2:20	3:25	4:30	5:35	6:40	Turtle Pond
Jumping Jessies	10:45	11:30	12:45	1:00	2:15	3:30	4:15	5:00		Reptile House

# Time

(Day #1)

What time is it?

**A.**     :     \_\_\_\_\_



**B.**     :     \_\_\_\_\_



- C.** What time will it be  $2\frac{1}{2}$  hours after ‘**A**’?
- D.** How much time passed between ‘**A**’ and ‘**B**’?
- E.** Write half past 9:00 another way.
- F.** How long is the ‘*Slithering Sams*’ show?
- G.** If you remained in the Snake House looking around for 30 minutes after the 10:20 a.m. show, what time did you exit the building?


\* **A, B, E & F**  
 \*\* **C, D, E, & F**  
 \*\*\* **C, E, F, & G**

# Time

(Day #2)

What time is it?

**A.**     :     \_\_\_\_\_



**B.**     :     \_\_\_\_\_



- C.** What time will it be  $2\frac{1}{2}$  hours after ‘**A**’?
- D.** How much time passed between ‘**A**’ and ‘**B**’?
- E.** Write half past 4:00 another way.
- F.** How long is the ‘*Venom Demo*’ show?
- G.** If you remained in the Rattle House looking around for 30 minutes after the 2:30 p.m. show, what time did you exit the building?

\* **A, B, D, & E**

\*\* **C, E, F, & G**

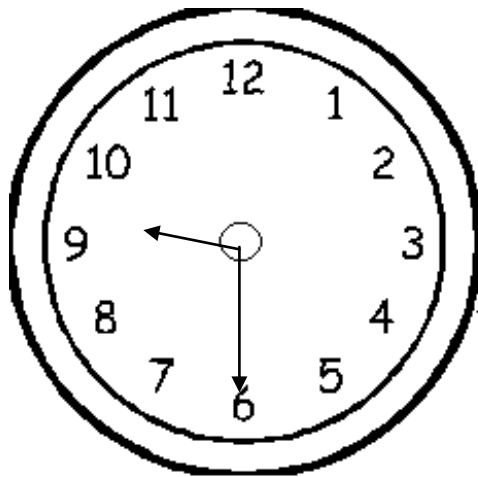
\*\*\* **C, D, F, & G**

# Time

(Day #3)

What time is it?

**A.**     :     \_\_\_\_\_



**B.**     :     \_\_\_\_\_



- C.** What time will it be  $2\frac{1}{2}$  hours after ‘**A**’?
- D.** How much time passed between ‘**A**’ and ‘**B**’?
- E.** Write half past 2:00 another way.
- F.** How long is the ‘*Slick Willie*’ show?
- G.** If you remained in the Alligator House looking around for 30 minutes after the 12:45 p.m. show, what time did you exit the building?

\* **A, B, E & F**

\*\* **C, D, E, & F**

\*\*\* **C, E, F, & G**

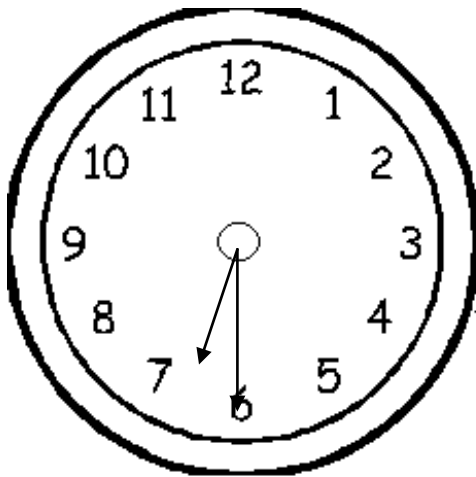
# Time

(Day #4)

What time is it?

**A.**     :     \_\_\_\_\_

**B.**     :     \_\_\_\_\_



- C.** What time will it be  $2\frac{1}{2}$  hours after ‘**A**’?
- D.** How much time passed between ‘**A**’ and ‘**B**’?
- E.** Write half past 6:00 another way.
- F.** How long is the ‘*Touché Toucan*’ show?
- G.** If you remained in the Bird House looking around for 30 minutes after the 4:00 p.m. show, what time did you exit the building?

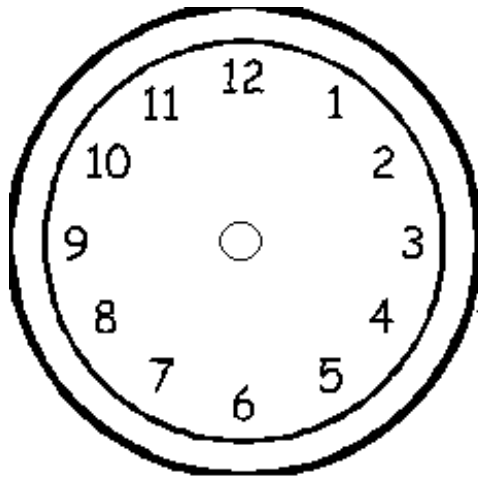
\* A, B, D, & F  
 \*\* C, E, F, & G  
 \*\*\* C, D, F, & G

# Time


(Day # \_\_)

What time is it?

**A.**     :     \_\_\_\_\_

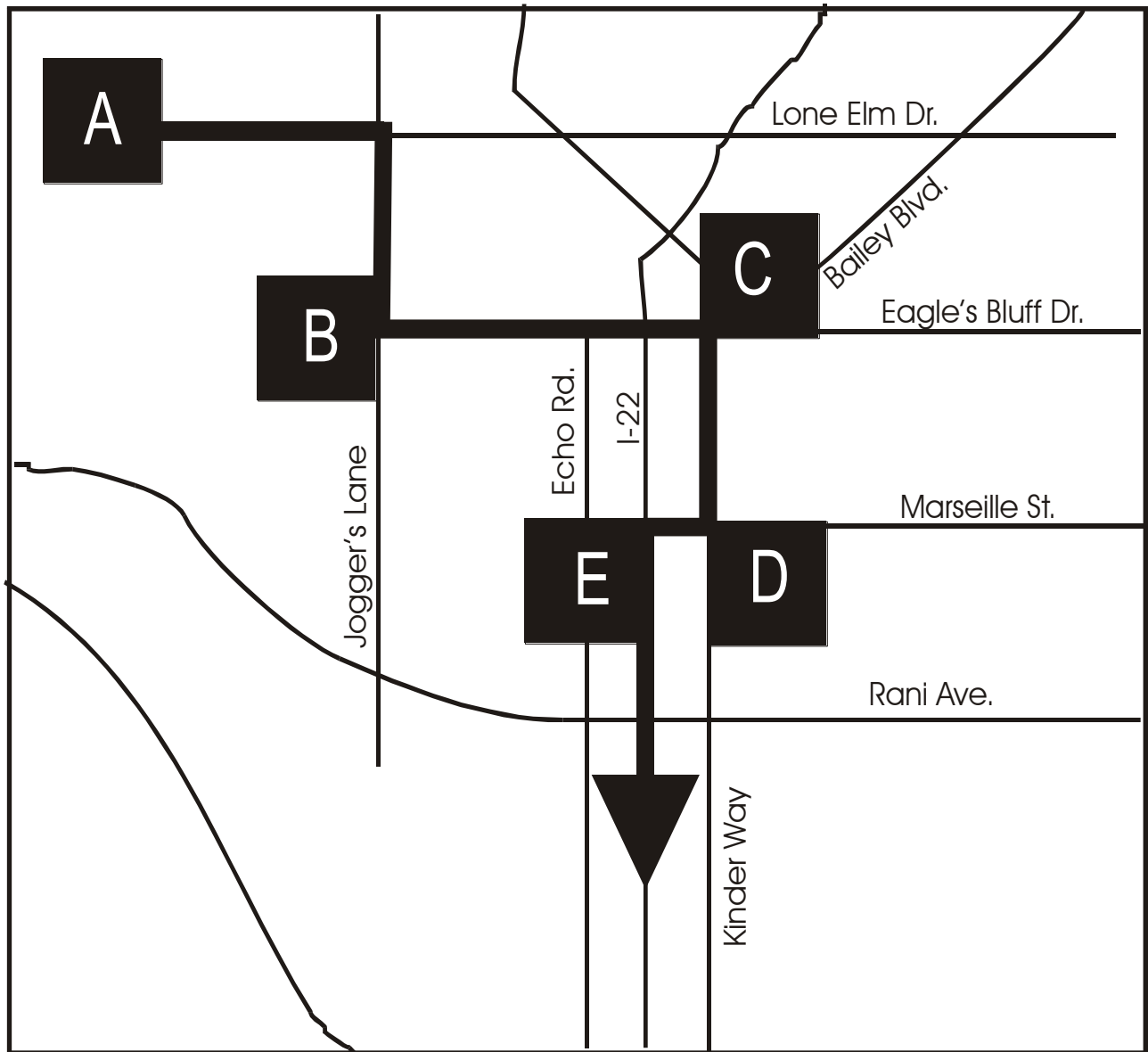


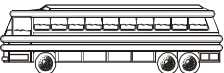
**B.**     :     \_\_\_\_\_



- C.** What time will it be  $2\frac{1}{2}$  hours after ‘**A**’?
- D.** How much time passed between ‘**A**’ and ‘**B**’?
- E.** Write half past \_\_\_\_\_ another way.
- F.** How long is ‘\_\_\_\_\_’ show?
- G.** If you remained in the \_\_\_\_\_ looking around for 30 minutes after the \_\_\_\_\_ show, what time did you exit the building?

\* **A, B, E, & F**  
 \*\* **C, D, E, & F**  
 \*\*\* **C, E, F, & G**




 <h2 style="display: inline;">Bus Schedule #2</h2>					
Lone Elm Dr. @ Jogger's Ln.	Eagle's Bluff Dr. @ Jogger's Ln.	Eagle's Bluff Dr. @ Bailey Blvd.	Marseille St. @ Kinder Wy	Marseille St. @ I-22	Bus Station ST
A	B	C	D	E	
6:50 AM	6:57 AM				7:40 AM
4:10 PM	4:17 PM	4:35 PM	4:41 PM	4:50 AM	5:00 PM
4:40 PM	4:47 PM	5:05 PM	5:11 PM	5:20 PM	5:40 PM
5:10 PM	5:17 PM	5:35 PM	5:41 PM	5:50 PM	6:00 PM
5:40 PM	5:47 PM	6:05 PM	6:17 PM	6:20 PM	6:40 PM
6:10 PM					7:00 PM



# Time

(Day #1)



- A.** What time is it?
- B.** What time was it  $1\frac{1}{2}$  hour before the above time?
- C.** Jackie is a cashier. She started working and received her first customer at the time shown on the clock above. She served a customer every ten minutes after that. What time did she serve her seventh customer?
- D.** 1 hr. = \_\_\_\_\_ min.


Refer to the Time Zone Chart:

- E.** If it is 3:00 in New York, what time is it in Alabama?
- F.** If you get on the 4:10 bus from Stop A, how long does it take you to get to Stop B?
- G.** If you get off the bus in problem 'F' and walk five minutes to your house, what time will you get home?

\* A, D, E & F  
 \*\* B, D, E, & F  
 \*\*\* B, C, E, & G

# Time

(Day #2)



- A.** What time is it?
- B.** What time was it  $1\frac{1}{2}$  hour before the above time?
- C.** Stephanie is a cashier. She started working and received her first customer at the time shown on the clock above. She served a customer every ten minutes after that. What time did she serve her seventh customer?
- D.** 2 hrs. = \_\_\_\_\_ min.

Refer to the Time Zone Chart:

- E.** If it is 3:00 in New York, what time is it in Colorado?
- F.** If you get on the 4:40 bus from Stop A, how long does it take you to get to Stop C?
- G.** If you get off the bus in problem 'F' and walk ten minutes to a store, what time will you get there?

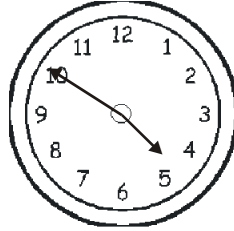
\* A, D, E, & F

\*\* B, C, E, & F

\*\*\* B, C, E, & G

# Time

(Day #3)



- A.** What time is it?
- B.** What time was it  $1\frac{1}{2}$  hour before the above time?
- C.** Ricky is a cashier. He started working and received his first customer at the time shown on the clock above. He served a customer every ten minutes after that. What time did he serve his seventh customer?
- D.** 3 hrs. = \_\_\_\_\_ min.

Refer to the Time Zone Chart:

- E.** If it is 3:00 in New York, what time is it in California?
- F.** If you get on the 5:10 bus from Stop A, how long does it take you to get to Stop D?
- G.** If you get off the bus in problem 'F' and walk fifteen minutes to a restaurant, what time will you get there?

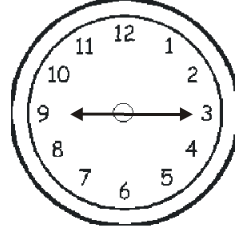
\* A, D, E & F

\*\* A, D, E, & F

\*\*\* B, C, D, & G

# Time

(Day #4)



- A.** What time is it?
- B.** What time was it  $1\frac{1}{2}$  hour before the above time?
- C.** Joe is a cashier. He started working and received his first customer at the time shown on the clock above. He served a customer every ten minutes after that. What time did he serve his seventh customer?
- D.** 5 hrs. = \_\_\_\_\_ min.


Refer to the Time Zone Chart:

- E.** If it is 3:00 in New York, what time is it in Hawaii?
- F.** If you get on the 5:40 bus from Stop A, how long does it take you to get to Stop E?
- G.** If you get off the bus in problem 'F' and walk twenty minutes to a park, what time will you get there?

\* A, D, E, & F  
 \*\* B, C, E, & F  
 \*\*\* B, C, E, & G

# Time

(Day # \_\_)



- A.** What time is it?
- B.** What time was it  $1\frac{1}{2}$  hour before the above time?
- C.** \_\_\_\_\_ is a cashier. She started working and received her first customer at the time shown on the clock above. She served a customer every ten minutes after that. What time did she serve her seventh customer?
- D.** \_\_\_\_\_ min. = \_\_\_\_\_ hr(s).

Refer to the Time Zone Chart:

- E.** If it is 3:00 in New York, what time is it in \_\_\_\_\_?
- F.** If you get on the \_\_\_\_\_ bus from Stop A, how long does it take you to get to Stop \_\_\_\_\_?
- G.** If you get off the bus in problem 'F' and walk \_\_\_\_\_ minutes to a store, what time will you get there?

\* A, D, E, & F

\*\* B, C, E, & F

\*\*\* B, C, E, & G